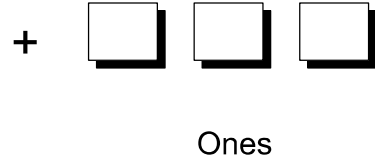
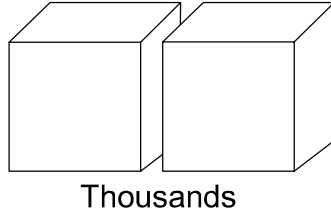


**Read each question, and circle the correct answer.**

1. George's year of birth is



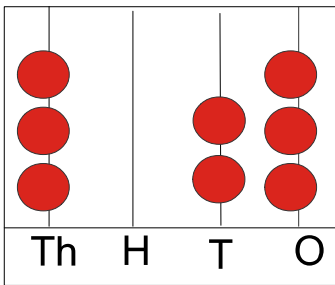
Rina is 6 years older to George. What is Rina's year of birth?

A. 2009

B. 2003

C. 2010

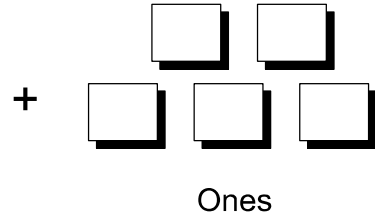
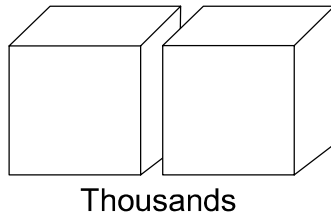
2. State whether True or False. The value of the following figure is  $3000 + 3 + 10$



A. True

B. False

3. George's year of birth is



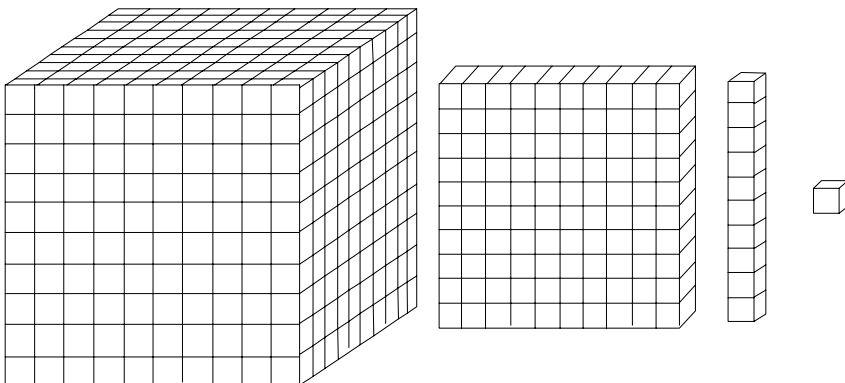
If Sam was born five years before George, what is his year of birth?

A. 2000

B. 205

C. 25

4. What do you call the three individual blocks used to model numbers?



A. 1,000

B. 10,000

C. 1,111