


Name: \_\_\_\_\_


Date: \_\_\_\_\_

Time: \_\_\_\_ : \_\_\_\_ - \_\_\_\_ : \_\_\_\_


What fraction does the colored part show?




$$\frac{1}{2}$$




$$\frac{1}{2}$$




$$\frac{2}{3}$$



$$\frac{1}{3}$$



$$\frac{3}{4}$$



$$\frac{6}{8}$$