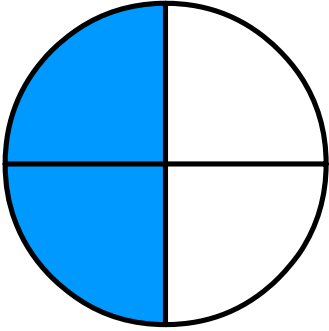


Name: \_\_\_\_\_

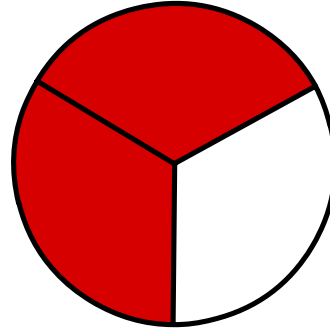
Date: \_\_\_\_\_

Time: \_\_\_\_ : \_\_\_\_ - \_\_\_\_ : \_\_\_\_

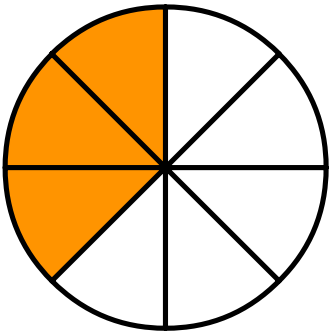
Color the boxes according to the fraction given.



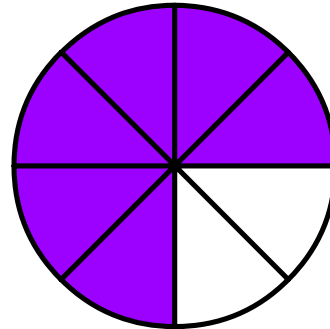
$$\frac{2}{4}$$



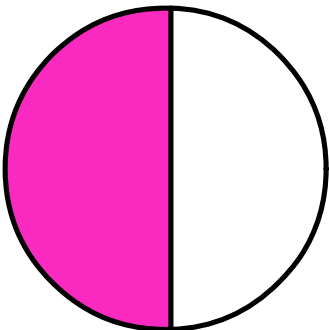
$$\frac{2}{3}$$



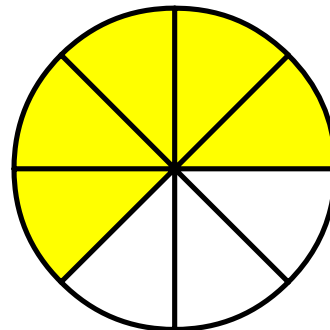
$$\frac{3}{8}$$



$$\frac{6}{8}$$



$$\frac{1}{2}$$



$$\frac{5}{8}$$