

Name: _____

Date: _____


Time: ____ : ____ - ____ : ____

Which of these objects is long, longer and longest?


LONG

LONGER


LONGEST



LONGER




LONGEST




LONG



LONGEST



LONGER



LONG