

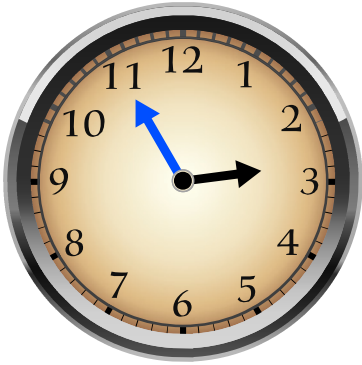
Name: _____

Date: _____


Time: ____ : ____ - ____ : ____

Draw the hands on the face of each clock to match the time given.

- The short hand (→) is for hours.
- The long hand (→) is for minutes.




02 : 55




04 : 10



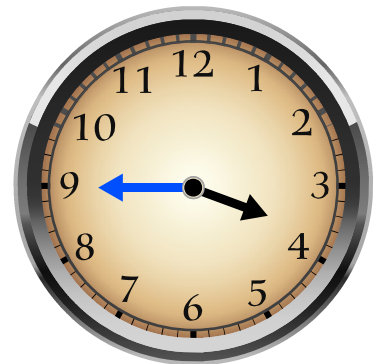
07 : 15



12 : 30



11 : 05



03 : 45