

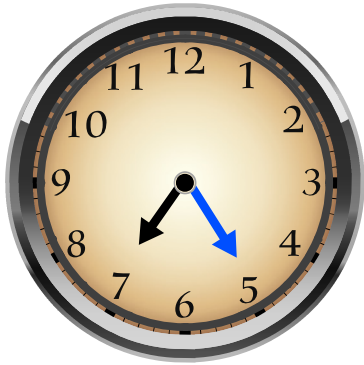
Name: \_\_\_\_\_

Date: \_\_\_\_\_

Time: \_\_\_\_ : \_\_\_\_ - \_\_\_\_ : \_\_\_\_

Look at the time given and draw the missing hand on the face of the clock.


- The short hand (→) is for hours.
- The long hand (→) is for minutes.



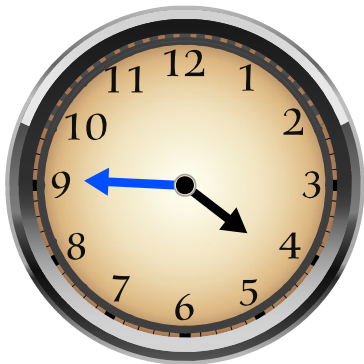
**07 : 25**




**06 : 10**



**12 : 40**



**04 : 45**



**01 : 35**



**07 : 10**