

Name: \_\_\_\_\_


Date: \_\_\_\_\_

Time: \_\_\_\_\_ : \_\_\_\_\_ - \_\_\_\_\_ : \_\_\_\_\_

**Tick mark the correct option in each question.**

---

1. Which of the following is an example of a perimeter?

- a. the floor space in your bedroom \_\_\_\_\_
- b. the distance from your house to school \_\_\_\_\_
- c. the length of the fence that surrounds your yard \_\_\_\_\_ 


2. A hexagon has sides that are 3 inches long. What is its perimeter?

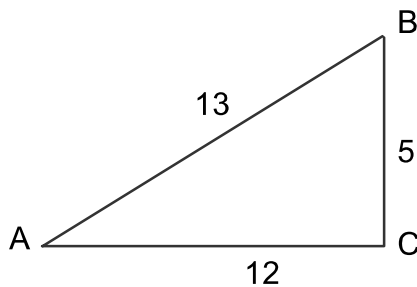
- a. 3 inches \_\_\_\_\_
- b. 18 inches \_\_\_\_\_ 
- c. 9 inches \_\_\_\_\_

3. A pentagon has sides that are 7 meters. What is the perimeter of the pentagon?

- a. 14 meters \_\_\_\_\_
- b. 70 meters \_\_\_\_\_ 
- c. 35 meters \_\_\_\_\_

4. What is the perimeter of this triangle?

- a. 30 \_\_\_\_\_ 
- b. 15 \_\_\_\_\_
- c. 25 \_\_\_\_\_



5. Calculate the perimeter of an equilateral triangle with a side length of 6cm.

- a. 18cm \_\_\_\_\_ 
- b. 24cm \_\_\_\_\_
- c. 12cm \_\_\_\_\_