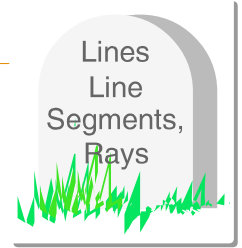


Name: \_\_\_\_\_


Date: \_\_\_\_\_

Time: \_\_\_\_\_ : \_\_\_\_\_ - \_\_\_\_\_ : \_\_\_\_\_

**Tick mark the correct option in each question.**




1. What is this?




- 1. Line
- 2. Line Segment
- 3. Ray

2. What is this?



- 1. Line
- 2. Line Segment
- 3. Ray

3. What is this?



- 1. Line
- 2. Line Segment
- 3. Ray

4. What is this?



- 1. Line
- 2. Point
- 3. Ray

5. Letter "A" represents a \_\_\_\_\_.



- 1. Line
- 2. Line Segment
- 3. Ray

6. Letter "B" represents a \_\_\_\_\_.



- 1. Line
- 2. Line Segment
- 3. Ray