
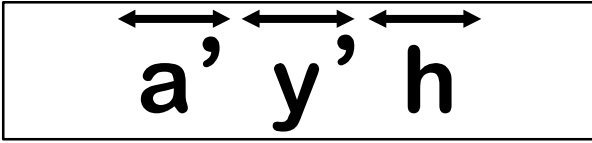


Tick mark the correct option in each question.




1. What do the following symbols refer to?



- 1. lines
- 2. line segments
- 3. endpoints

2. Choose the name that could be given this line segment.



- 1. \overleftrightarrow{T}
- 2. \overline{TT}
- 3. \overline{TU}

3. Choose the name that could be given this line.




- 1. \overleftrightarrow{p}
- 2. \overleftrightarrow{A}
- 3. \overline{T}

4. EF is a _____.




- 1. Line
- 2. Line Segment
- 3. Ray

5. CD is a _____.



- 1. Line
- 2. Line Segment
- 3. Ray

6. How many line segments are there in this picture?



- 1. 4
- 2. 5
- 3. 6