


Name: _____

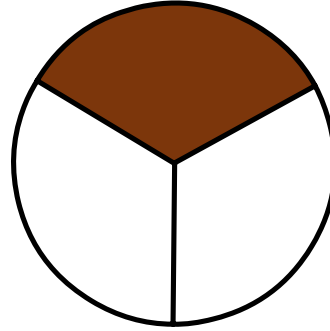
Date: _____

Time: ____ : ____ - ____ : ____

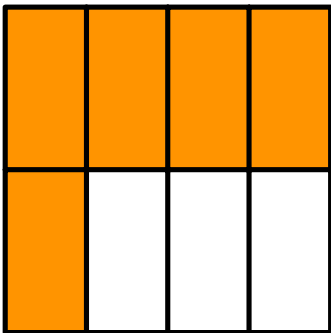
What fraction does the colored part show?



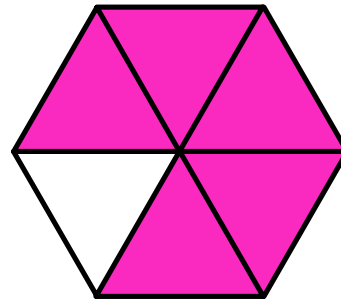
$$\frac{3}{4}$$



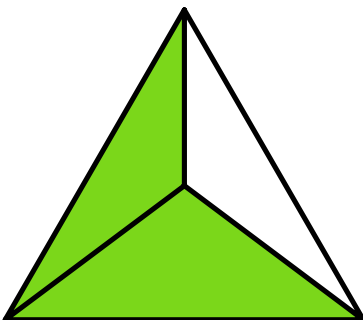
$$\frac{1}{3}$$



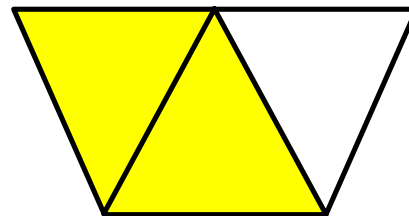
$$\frac{5}{8}$$



$$\frac{5}{6}$$



$$\frac{2}{3}$$



$$\frac{2}{3}$$