


Name: _____

Date: _____


Time: ____ : ____ - ____ : ____

Look at the time given and draw the missing hand on the face of the clock.


- The short hand (—→) is for hours.
- The long hand (—→) is for minutes.



06 : 50



11 : 35



02 : 45



04 : 15



08 : 10



09 : 30