

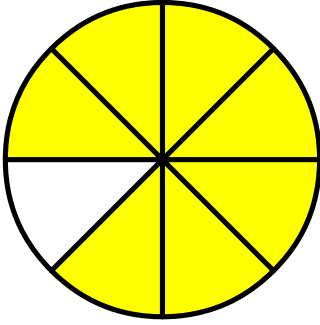
Name: \_\_\_\_\_

Date: \_\_\_\_\_

Time: \_\_\_\_ : \_\_\_\_ - \_\_\_\_ : \_\_\_\_

Circle the correct fraction from the given choices.

1.




$$\frac{7}{8}$$

$$\frac{5}{7}$$

$$\frac{6}{8}$$

2.




$$\frac{1}{2}$$

$$\frac{4}{6}$$

$$\frac{2}{3}$$

3.

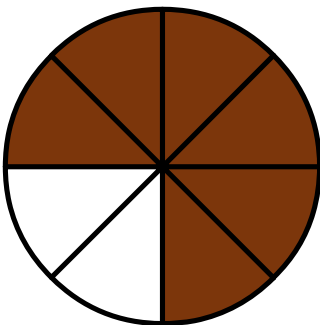


$$\frac{3}{4}$$

$$\frac{2}{3}$$

$$\frac{3}{6}$$

4.



$$\frac{2}{3}$$

$$\frac{6}{8}$$

$$\frac{1}{2}$$