



















Name: _____

Date: _____

Time: ____ : ____ - ____ : ____

Subtract to find each difference.

1	2	3	4	5	6	7	8	9	10
---	---	---	---	---	---	---	---	---	----

$3 - 1 = \boxed{2}$  	$8 - 4 = \boxed{4}$  
$7 - 5 = \boxed{4}$  	$9 - 6 = \boxed{3}$  
$6 - 4 = \boxed{2}$  	$7 - 3 = \boxed{4}$  
$8 - 2 = \boxed{6}$  	$9 - 1 = \boxed{8}$  
$8 - 7 = \boxed{1}$  	$5 - 4 = \boxed{1}$ 