





Find the sum and write the answer in the blank space.




+




=



+



=



$$\begin{array}{r} 5 \\ + 3 \\ \hline 8 \end{array}$$

$$\begin{array}{r} 3 \\ + 2 \\ \hline 5 \end{array}$$

$$\begin{array}{r} 6 \\ + 4 \\ \hline 10 \end{array}$$

$$\begin{array}{r} 1 \\ + 4 \\ \hline 5 \end{array}$$