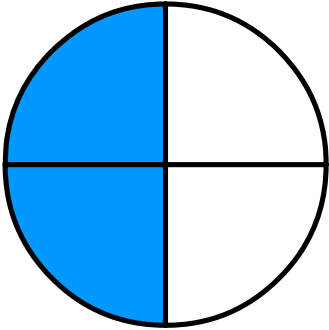


Name: _____

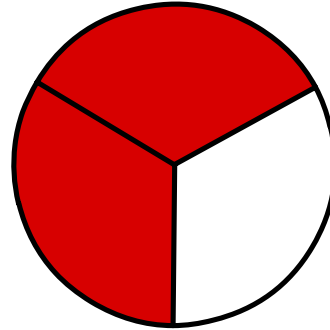
Date: _____

Time: ____ : ____ - ____ : ____

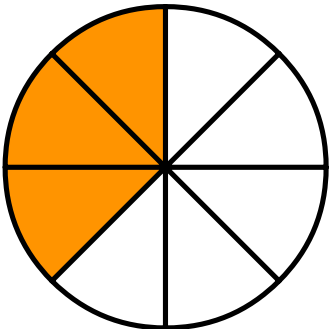
What fraction does the colored part show?



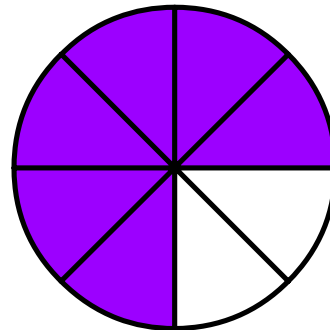
$$\frac{2}{4}$$



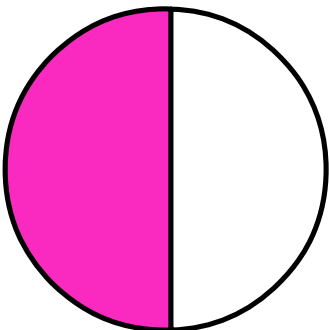
$$\frac{2}{3}$$



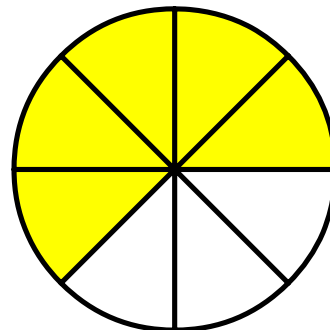
$$\frac{3}{8}$$



$$\frac{6}{8}$$



$$\frac{1}{2}$$



$$\frac{5}{8}$$