

Name: _____

Date: _____

Time: _____ : _____ - _____ : _____

Look at the clock and write down the time.

- The short hand (—→) is for hours.
- The long hand (—→) is for minutes.



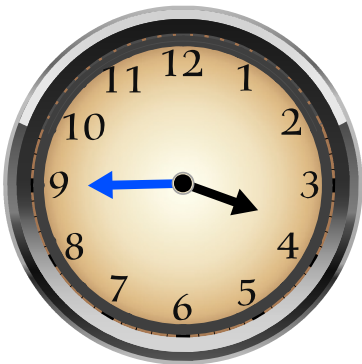
10 : 55



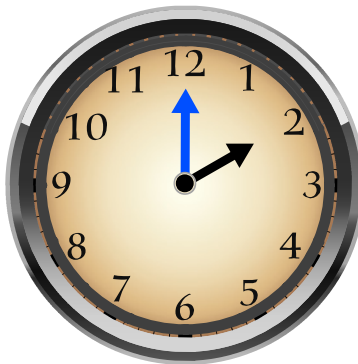
05 : 10




01 : 20



03 : 45



02 : 00



09 : 20
