

Name: _____

























Date: _____

Time: ____ : ____ - ____ : ____

Make a picture graph by counting the number of sports equipments.



| Games Collection | |
|--|---|
|  | |
|  | / |
|  | |

| | | | | | | | |
|---|---|---|---|---|---|---|---|
|  |  |  |  |  |  |  |  |
|  |  |  |  |  |  |  |  |
|  |  |  |  |  |  |  |  |