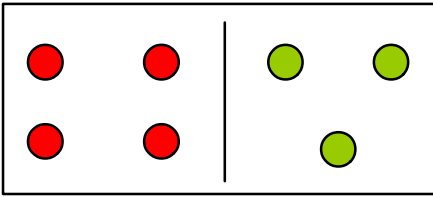


Name: \_\_\_\_\_

Date: \_\_\_\_\_

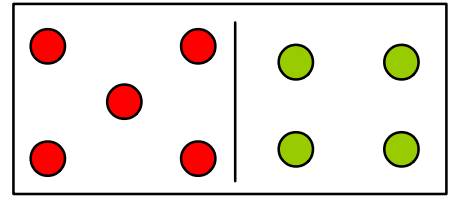
Time: \_\_\_\_\_ : \_\_\_\_\_ - \_\_\_\_\_ : \_\_\_\_\_

**Count the dots and add them.**



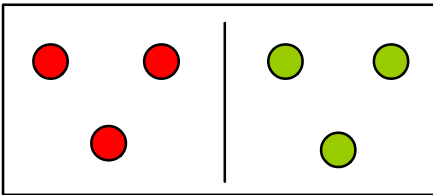
  4          3  

Total :-   7  



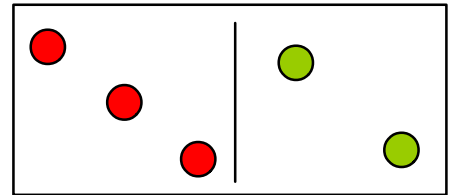
\_\_\_\_\_

Total :- \_\_\_\_\_



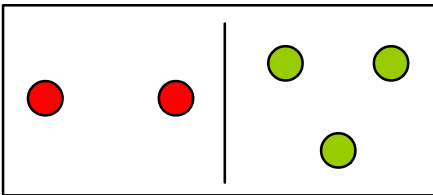
\_\_\_\_\_

Total :- \_\_\_\_\_



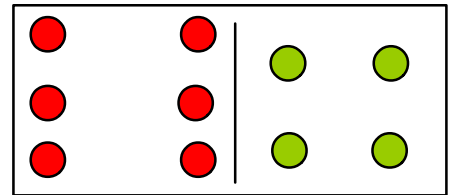
\_\_\_\_\_

Total :- \_\_\_\_\_



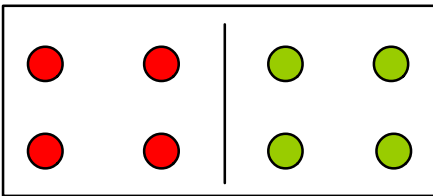
\_\_\_\_\_

Total :- \_\_\_\_\_



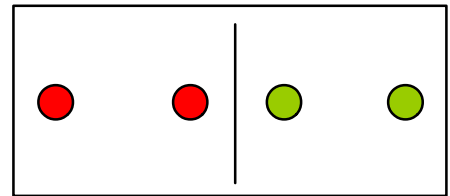
\_\_\_\_\_

Total :- \_\_\_\_\_



\_\_\_\_\_

Total :- \_\_\_\_\_



\_\_\_\_\_

Total :- \_\_\_\_\_