

Name: _____

Date: _____


Time: ____ : ____ - ____ : ____

Look at the time given and draw the missing hand on the face of the clock.


- The short hand (→) is for hours.
- The long hand (→) is for minutes.



10 : 10




05 : 15



07 : 30



12 : 20



06 : 45



04 : 10