



**Read each question, and circle the correct answer.**

1. If  represents 1 ones what would  represent?

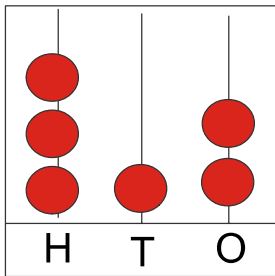


A. 10 Tens

B. 9 Ones

C. 1 Tens

2. State whether True or False.

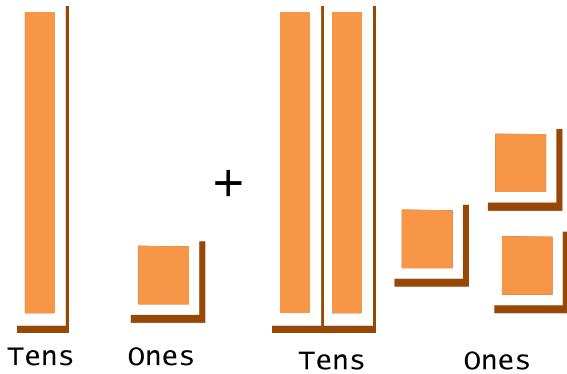


=Three thousand one hundred and two

A. True

B. False

3. What would be the Tens place value if you add?

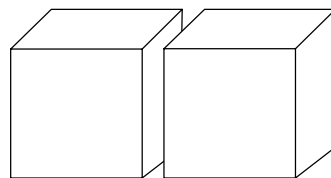


A. 4

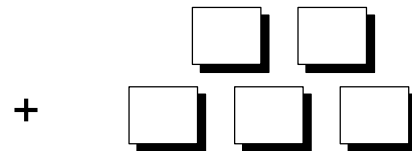
B. 40

C. 30

4. George's year of birth is



Thousands



Ones

Which year was he born?

A. 2000

B. 205

C. 2005