


Name: \_\_\_\_\_

Date: \_\_\_\_\_

Time: \_\_\_\_ : \_\_\_\_ - \_\_\_\_ : \_\_\_\_

Circle the correct fraction from the given choices.

1.




$$\frac{1}{2}$$

$$\frac{2}{3}$$

$$\frac{2}{4}$$

2.




$$\frac{1}{3}$$

$$\frac{3}{4}$$

$$\frac{1}{2}$$

3.




$$\frac{2}{4}$$

$$\frac{3}{5}$$

$$\frac{1}{4}$$

4.



$$\frac{2}{3}$$

$$\frac{1}{3}$$

$$\frac{1}{2}$$