


Name: \_\_\_\_\_

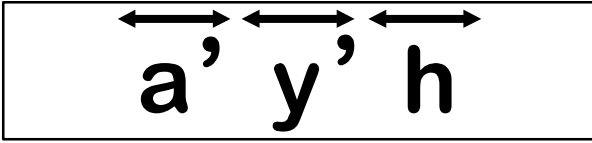
Date: \_\_\_\_\_

Time: \_\_\_\_ : \_\_\_\_ - \_\_\_\_ : \_\_\_\_

**Tick mark the correct option in each question.**




1. What do the following symbols refer to?



- 1. lines
- 2. line segments
- 3. endpoints

2. Choose the name that could be given this line segment.



- 1.  $\overleftrightarrow{T}$
- 2.  $\overline{TT}$
- 3.  $\overline{TU}$

3. Choose the name that could be given this line.




- 1.  $\overleftrightarrow{p}$
- 2.  $\overleftrightarrow{A}$
- 3.  $\overline{T}$

4. EF is a \_\_\_\_\_.




- 1. Line
- 2. Line Segment
- 3. Ray

5. CD is a \_\_\_\_\_.



- 1. Line
- 2. Line Segment
- 3. Ray

6. How many line segments are there in this picture?



- 1. 4
- 2. 5
- 3. 6