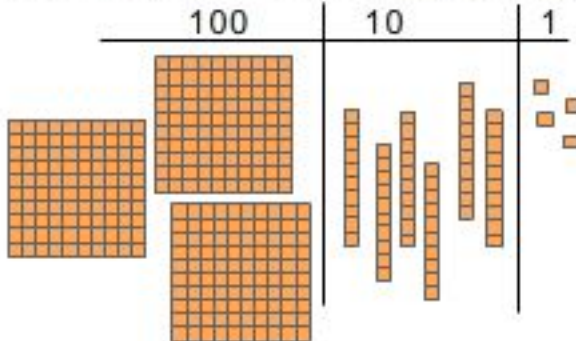


Read each question, and circle the correct answer.

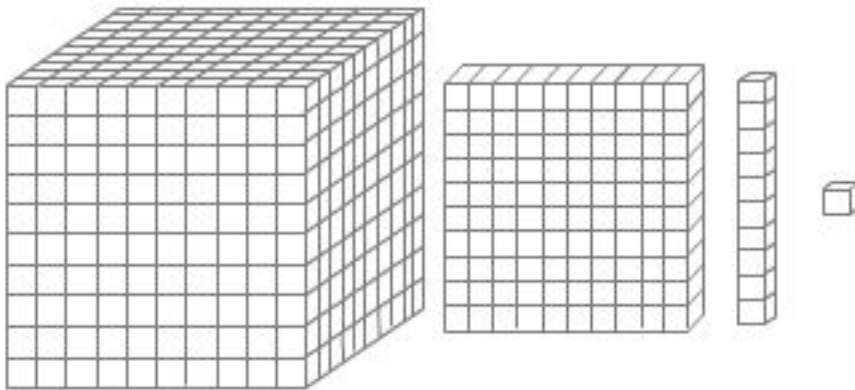
1. What number is represented with these base ten blocks?



- A. 3,064
- B. 364
- C. 314

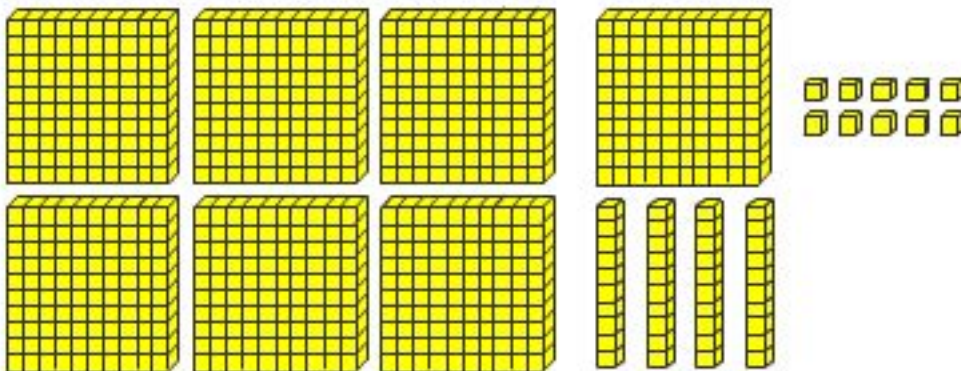


2. What do you call the three individual blocks used to model numbers?



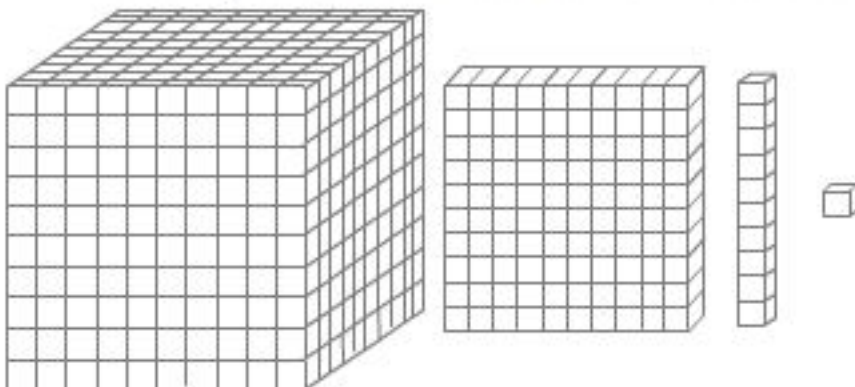
- A. 1,000
- B. 10,000
- C. 1,111

3. What number is represented with these base ten blocks?



- A. 745
- B. 740
- C. 750

4. What do you call the three individual blocks used to model numbers?



- A. Cube, flat, skinny, and bit
- B. Cube, flat, long, and bit
- C. Both a and b