

Name: _____

Date: _____


Time: ____ : ____ - ____ : ____

Look at the clock and write down the time.


- The short hand (→) is for hours.
- The long hand (→) is for minutes.




____ : ____



____ : ____




____ : ____



____ : ____



____ : ____



____ : ____