


Name: \_\_\_\_\_


Date: \_\_\_\_\_

Time: \_\_\_\_ : \_\_\_\_ - \_\_\_\_ : \_\_\_\_

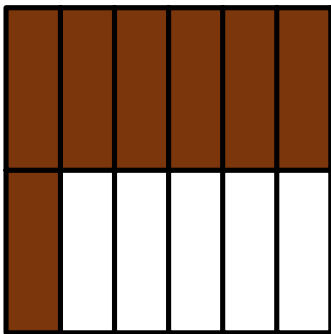
What fraction does the colored part show?




$\frac{1}{2}$



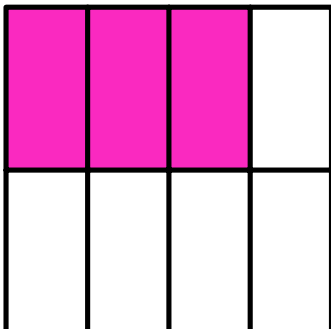
\_\_\_\_\_



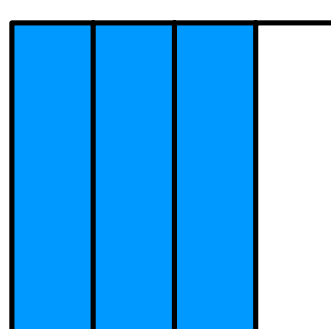
\_\_\_\_\_



\_\_\_\_\_



\_\_\_\_\_



\_\_\_\_\_