






Name: \_\_\_\_\_

Date: \_\_\_\_\_

Time: \_\_\_\_ : \_\_\_\_ - \_\_\_\_ : \_\_\_\_

Subtract and write the correct number in the box.

	$\begin{array}{r} 9 \\ - 3 \\ \hline \\ \hline \end{array}$
	$\begin{array}{r} 8 \\ - 3 \\ \hline \\ \hline \end{array}$
	$\begin{array}{r} 6 \\ - 4 \\ \hline \\ \hline \end{array}$
	$\begin{array}{r} 5 \\ - 3 \\ \hline \\ \hline \end{array}$
	$\begin{array}{r} 4 \\ - 1 \\ \hline \\ \hline \end{array}$