

Name: _____

Date: _____

Time: ____ : ____ - ____ : ____

Look at the clock and write down the time.

- The short hand (→) is for hours.
- The long hand (→) is for minutes.



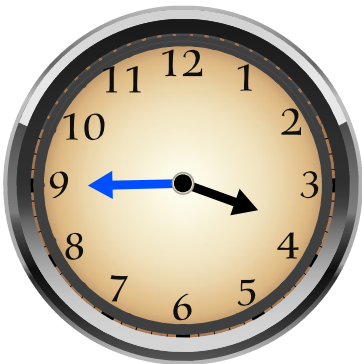
.....
:.....



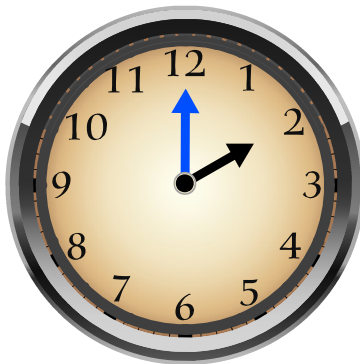
.....
:.....




.....
:.....



.....
:.....



.....
:.....



.....
:.....