


Addition Sentences Within 20

Choose the addition sentence which is shown by the model.

1.



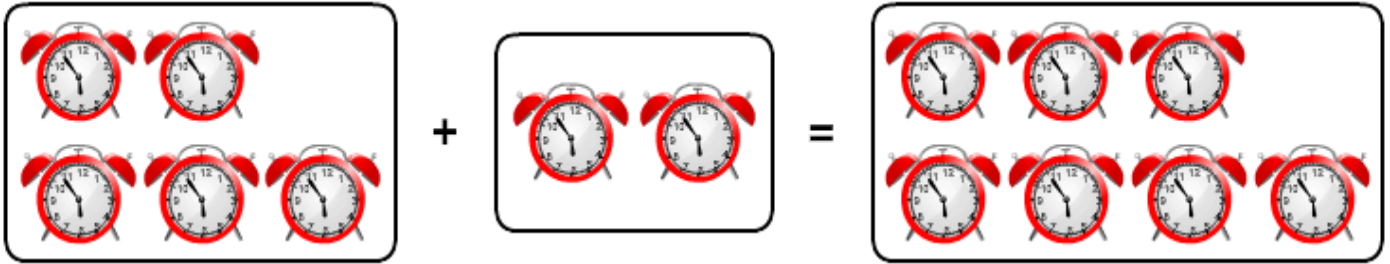
- $8 + 4 = 12$
- $7 + 8 = 15$
- $8 + 6 = 14$
- $7 + 9 = 16$

2.



- $9 + 4 = 13$
- $9 + 3 = 12$
- $8 + 3 = 11$
- $7 + 3 = 10$

3.



- $5 + 4 = 9$
- $2 + 3 = 5$
- $7 + 2 = 9$
- $5 + 2 = 7$

4.



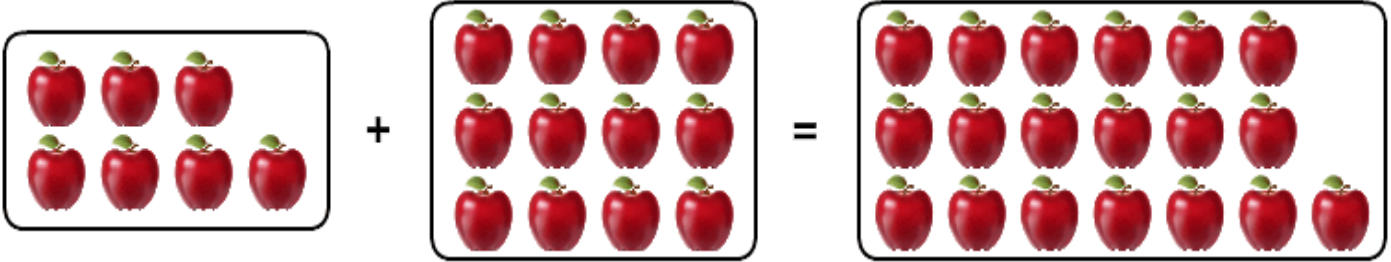
- $5 + 6 = 11$
- $6 + 3 = 9$
- $4 + 3 = 7$
- $4 + 6 = 10$

5.



- $9 + 5 = 14$
- $9 + 3 = 12$
- $3 + 10 = 13$
- $10 + 1 = 11$

6.



- $9 + 5 = 14$
- $10 + 8 = 18$
- $7 + 12 = 19$
- $7 + 6 = 13$