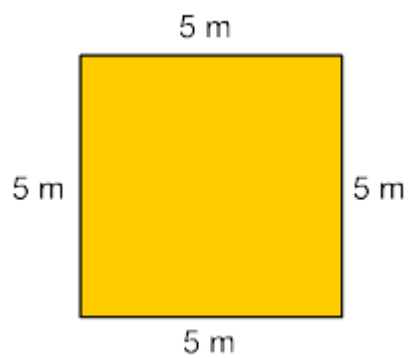


Perimeter of Polygons

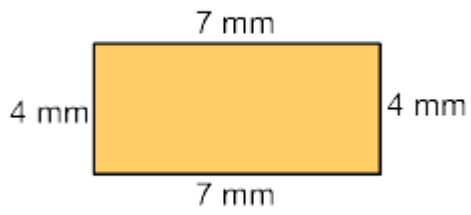
What is the perimeter of the given shape?

1.



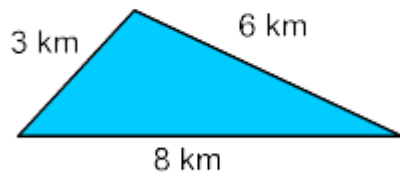
- 20 m
- 16 m
- 15 m
- 18 m

2.



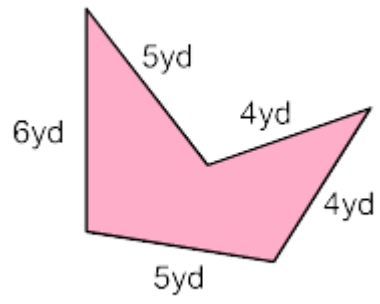
- 20 mm
- 22 mm
- 18 mm
- 15 mm

3.



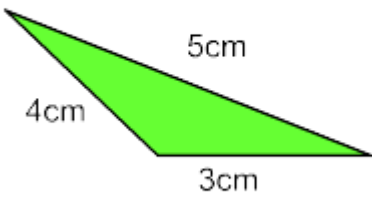
- 11 km
- 15 km
- 18 km
- 17 km

4.



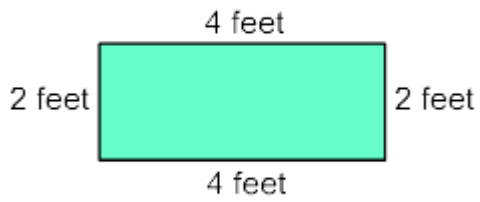
- 22 yd
- 26 yd
- 24 yd
- 30 yd

5.



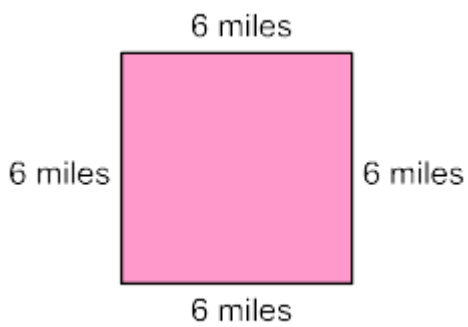
- 15 cm
- 12 cm
- 10 cm
- 18 cm

6.



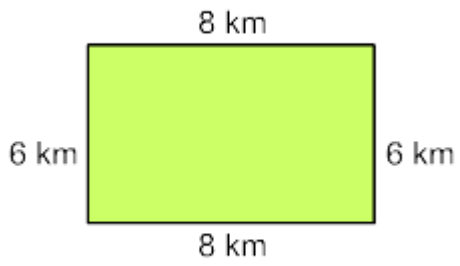
- 12 feet
- 15 feet
- 13 feet
- 10 feet

7.



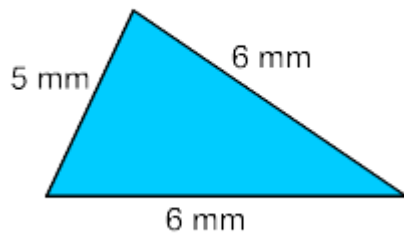
- 24 miles
- 20 miles
- 22 miles
- 32 miles

8.



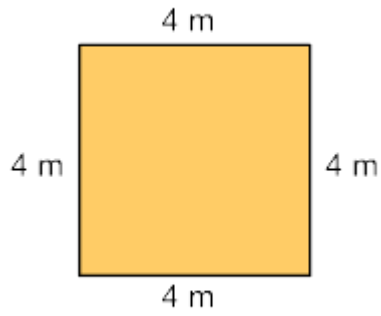
- 24 km
- 20 km
- 28 km
- 32 km

9.



- 14 mm
- 15 mm
- 16 mm
- 17 mm

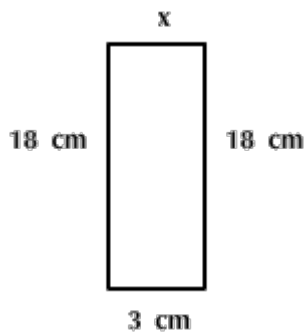
10.



- 14 m
- 15 m
- 16 m
- 17 m

Solve for x , if the perimeter is 42 cm.

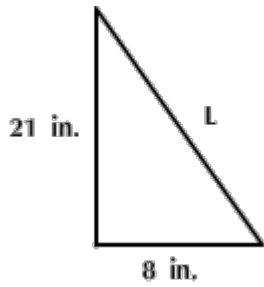
11.



- 3 cm
- 5 cm
- 18 cm
- 6 cm

Solve for L, if the perimeter is 54 in.

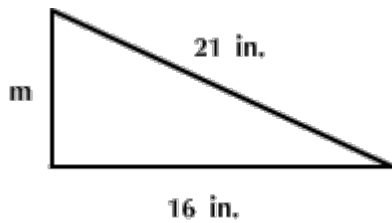
12.



- 25 in.
- 30 in.
- 29 in.
- 23 in.

Solve for m if the perimeter is 48 in.

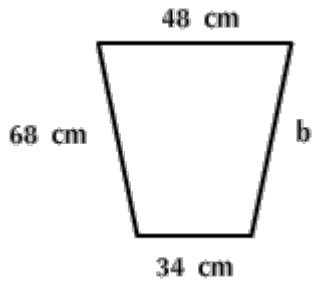
13.



- 48 in.
- 18 in.
- 9 in.
- 11 in.

Solve for b , if the perimeter is 218 cm.

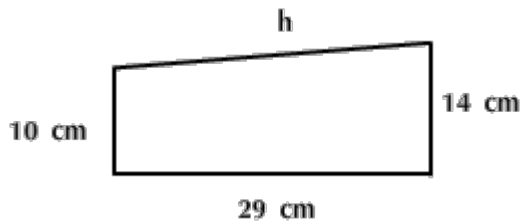
14.



- 52 cm
- 60 cm
- 68 cm
- 48 cm

Solve for h if the perimeter is 87 cm.

15.



- 87 cm
- 34 cm
- 29 cm
- 44 cm