


Count up to 120

Count and write down the total number of books.



Total number of books =

Count and write down the total number of bouquets.



Total number of bouquets =

Count and write down the total number of balls.



Total number of balls =

Count and write down the total number of cars.



Total number of cars =

Count and write down the total number of dolls.



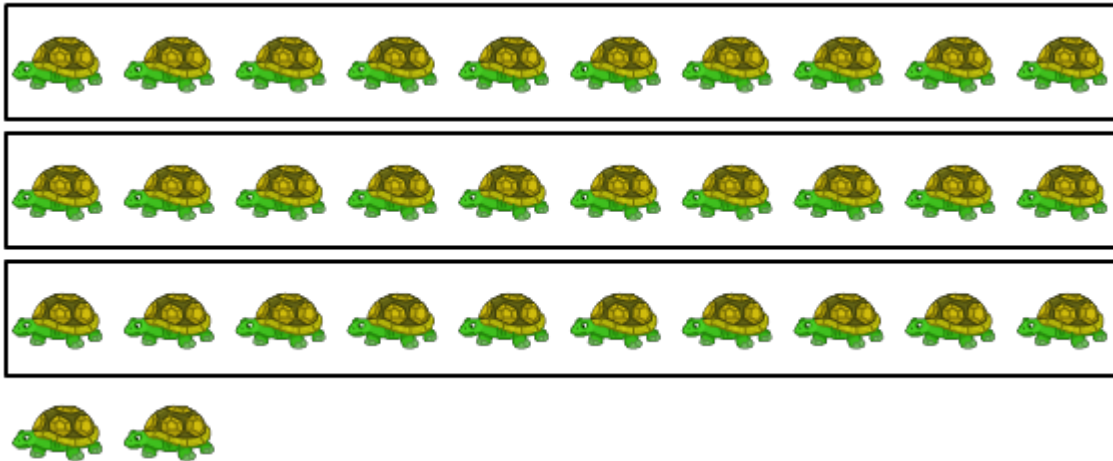
Total number of dolls =

Count and write down the total number of umbrellas.




Total number of umbrellas =

Count and write down the total number of turtles.




Total number of turtles =

Count and write down the total number of pears.



Total number of pears =

Count and write down the total number of oranges.




Total number of oranges =

Count and write down the total number of goats.



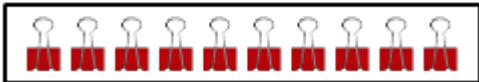
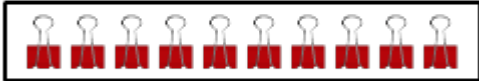
Total number of goats =

Count and write down the total number of teddies.



Total number of teddies =

Count and write down the total number of paper clips.



Total number of paper clips =

Count and write down the total number of pencils.



Total number of pencils =

If Annie counted from 113 to 119, how many numbers did she say? Write all the numbers she counted. (Write numbers separated by commas)

Number count =

Numbers:

Maria began counting from 99 and stopped at 105. The numbers she said are given below. Write the missing numbers in the blank spaces.

99, 100, , , 103, , 105