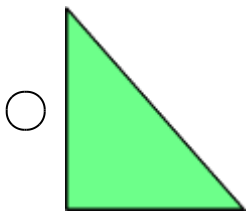
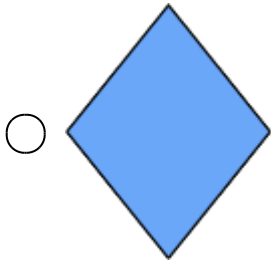


## 2D and 3D Shapes

---

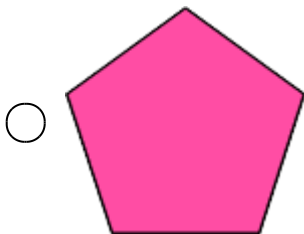
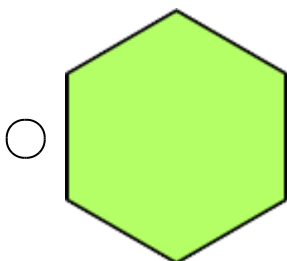
Which of the following shapes has fewer angles?

1.



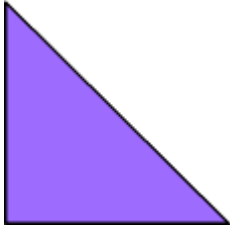
Which of the following shapes has 6 angles?

2.




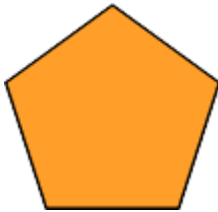
Which of the following shapes has fewer corners?

3.



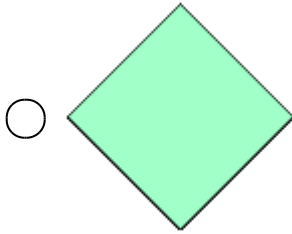
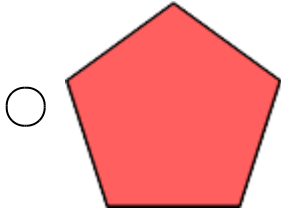
Which of the following shapes has 4 corners?

4.



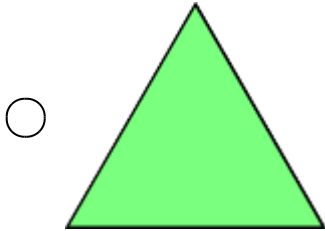
Which of the following shapes has fewer angles?

5.



Which of the following shapes has 3 angles?

6.



Which of the following shapes has fewer edges?

7.



Which of the following shapes has 8 vertices?

8.



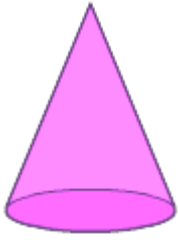
Which of the following shapes has fewer vertices?

9.



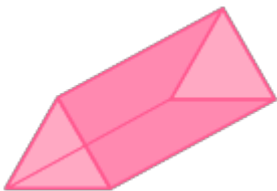
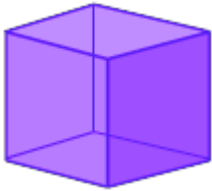
Which of the following shapes has 2 faces?

10.



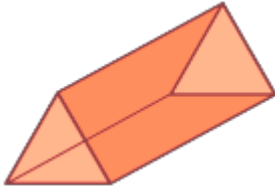
Which of the following shapes has fewer faces?

11.



Which of the following shapes has 6 vertices?

12.



Which of the following shapes has fewer edges?

13.



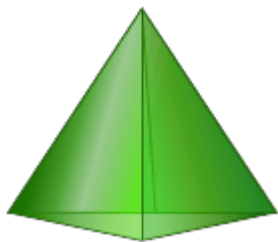
What is the sum of vertices and faces of the given shape?

14.



- 14
- 8
- 9
- 10

15.



- 14
- 8
- 9
- 10