

Types of Angles Part 1

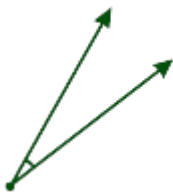
Which type of angle is this?

1.



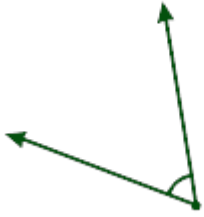
- Acute angle
- Right angle
- Obtuse angle
- Straight angle

2.



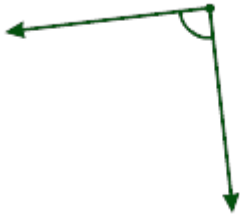
- Acute angle
- Right angle
- Obtuse angle
- Straight angle

3.



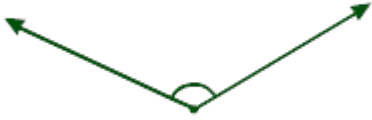
- Acute angle
- Right angle
- Obtuse angle
- Straight angle

4.



- Acute angle
- Right angle
- Obtuse angle
- Straight angle

5.



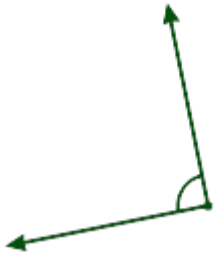
- Acute angle
- Right angle
- Obtuse angle
- Straight angle

6.



- Acute angle
- Right angle
- Obtuse angle
- Straight angle

7.



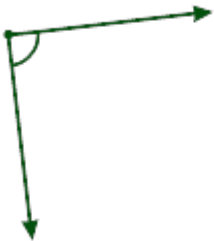
- Acute angle
- Right angle
- Obtuse angle
- Straight angle

What is the measure of a right angle?

8. 45?
 60?
 90?
 none of the above

Which type of angle is this?

9.



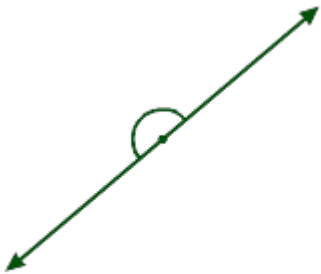
- Acute angle
- Right angle
- Obtuse angle
- Straight angle

10.



- Acute angle
- Right angle
- Obtuse angle
- Straight angle

11.



- Acute angle
- Right angle
- Obtuse angle
- Straight angle

12.




- Acute angle
- Right angle
- Obtuse angle
- Straight angle

13.



- Acute angle
- Right angle
- Obtuse angle
- Straight angle

14.



- Acute angle
- Right angle
- Obtuse angle
- Straight angle

15.



- Acute angle
- Right angle
- Obtuse angle
- Straight angle