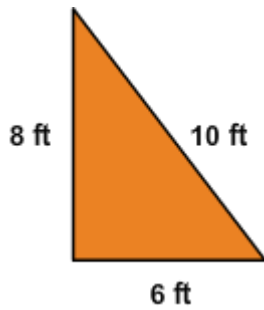


Classify Triangles by Sides

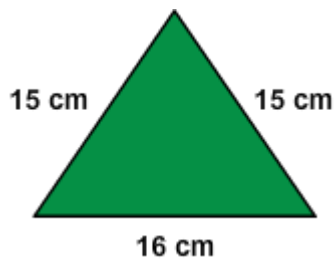
What kind of triangle is this?

1.



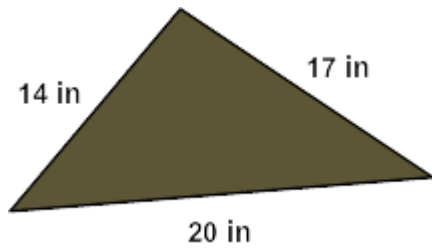
- scalene
- isosceles but not equilateral
- equilateral

2.



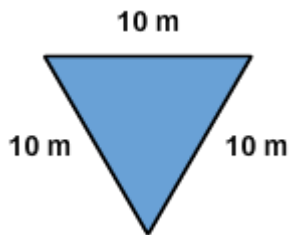
- scalene
- isosceles but not equilateral
- equilateral

3.



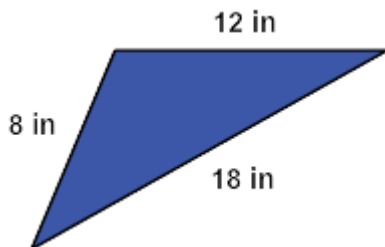
- scalene
- isosceles but not equilateral
- equilateral

4.



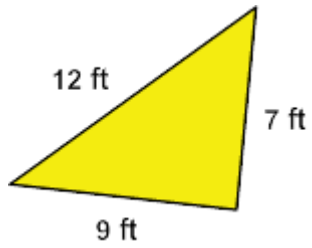
- scalene
- isosceles but not equilateral
- equilateral

5.



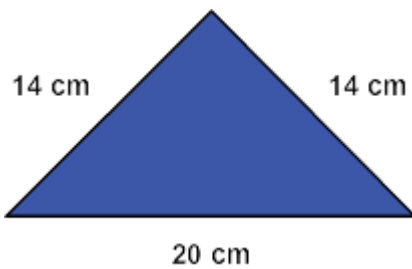
- scalene
- isosceles but not equilateral
- equilateral

6.



- scalene
- isosceles but not equilateral
- equilateral

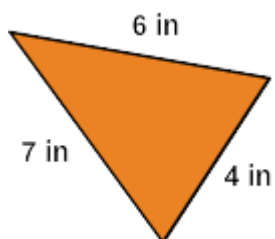
7.



- scalene
- isosceles but not equilateral
- equilateral

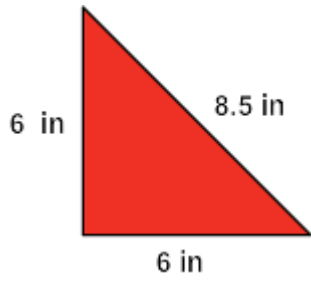
Is this triangle scalene?

8.



- yes
- no

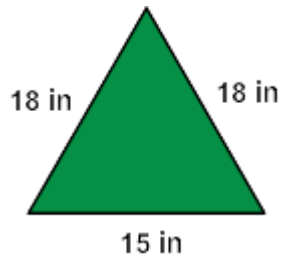
9.



yes

no

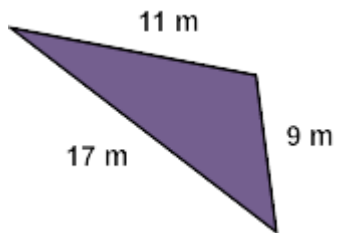
10.



yes

no

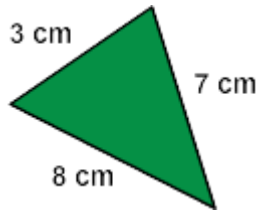
11.



yes

no

12.

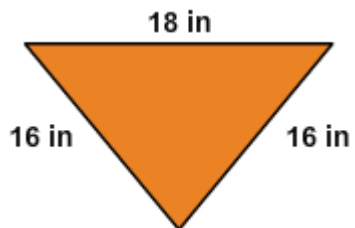


yes

no

Is this triangle isosceles?

13.

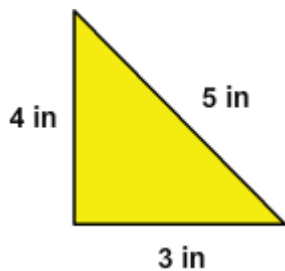


yes

no

What kind of triangle is this?

14.

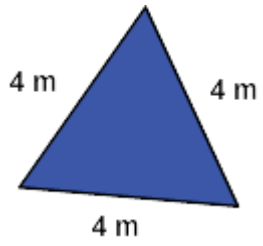


scalene

isosceles but not equilateral

equilateral

15.



- scalene
- isosceles but not equilateral
- equilateral