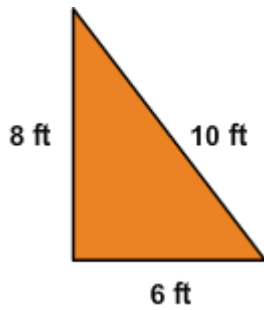


Classify Triangles

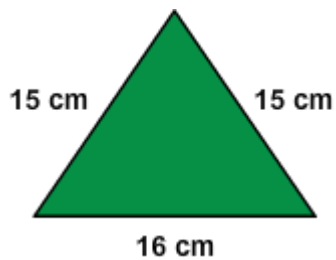
What kind of triangle is this?

1.



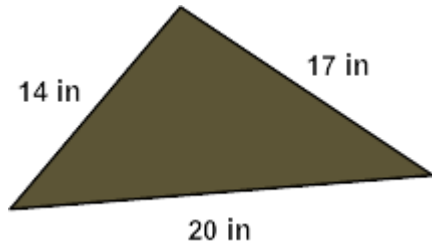
- scalene
- isosceles but not equilateral
- equilateral

2.



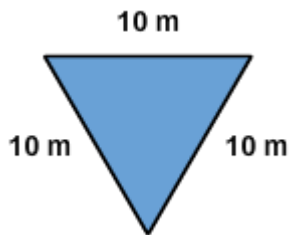
- scalene
- isosceles but not equilateral
- equilateral

3.



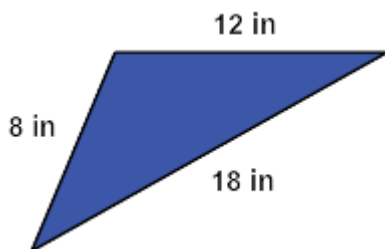
- scalene
- isosceles but not equilateral
- equilateral

4.



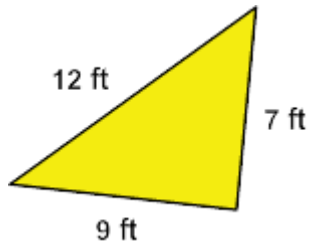
- scalene
- isosceles but not equilateral
- equilateral

5.



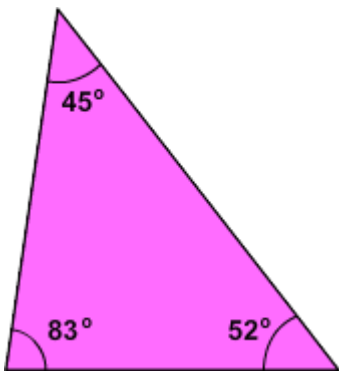
- scalene
- isosceles but not equilateral
- equilateral

6.



- scalene
- isosceles but not equilateral
- equilateral

7.



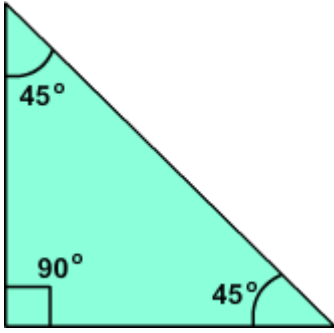
- acute
- right
- obtuse

8.



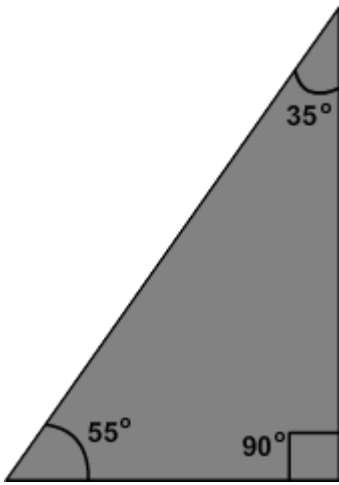
- acute
- right
- obtuse

9.



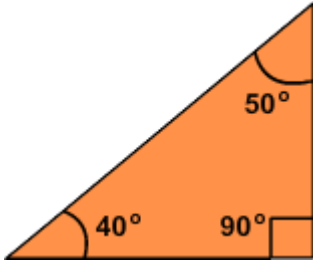
- acute
- right
- obtuse

10.



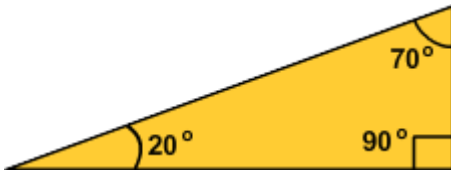
- acute
- right
- obtuse

11.



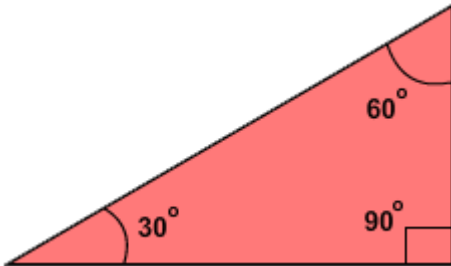
- acute
- right
- obtuse

12.



- acute
- right
- obtuse

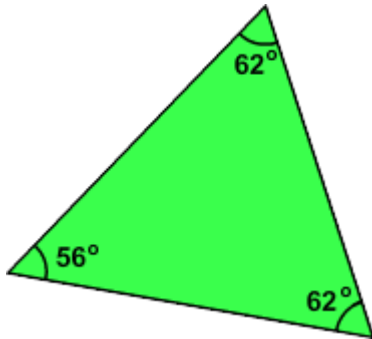
13.



- acute
- right
- obtuse

Is this triangle isosceles?

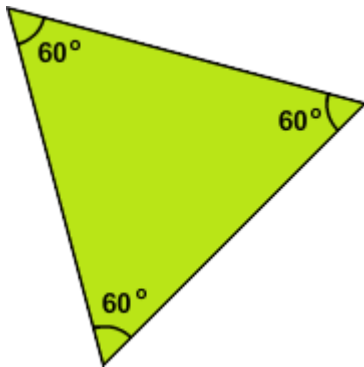
14.



- yes
- no

Is this triangle equilateral?

15.



- yes
- no