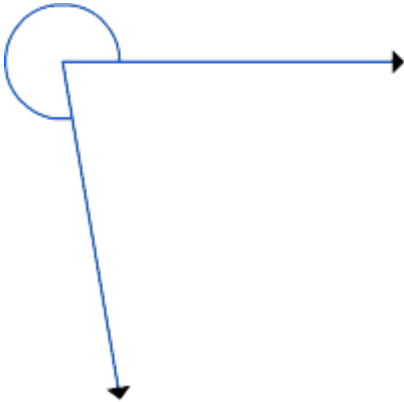


Estimate Angles

What is measure of the given angle? Choose the best estimate.

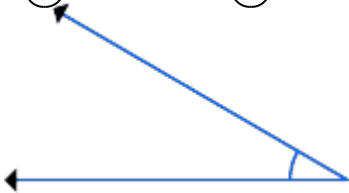
1.



240° 270°

2.

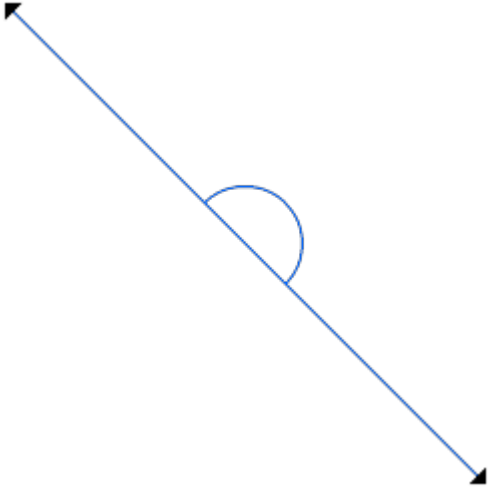
280° 340°



10° 30°

60° 70°

3.



100°

160°

4.

180°

200°



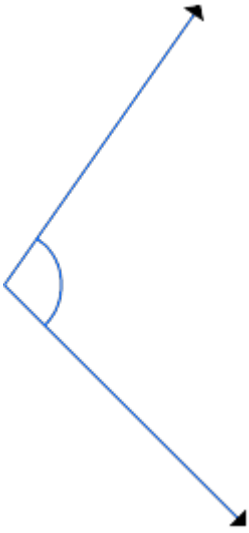
150°

170°

190°

250°

5.



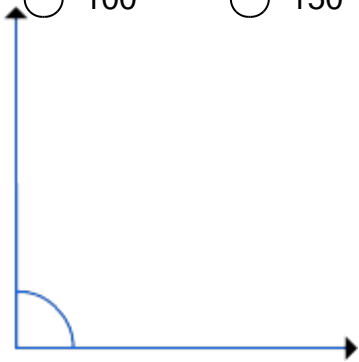
60°

80°

6.

100°

150°



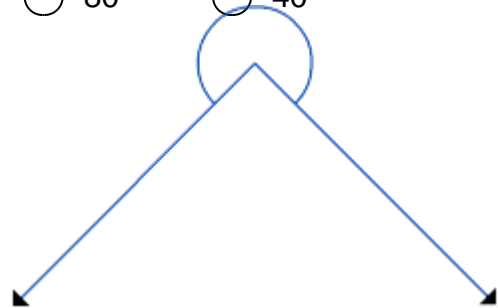
60°

90°

7.

80°

40°



90°

180°

270°

360°




90°

180°



270°

360°




110°

90°

80°

50°

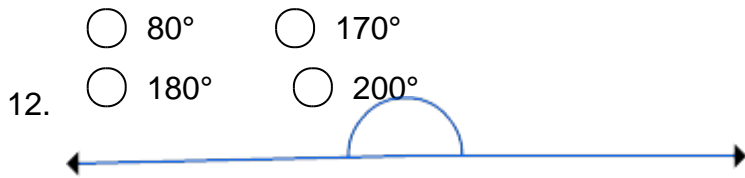


59°

79°

91°

121°



80°

170°

180°

200°

150°

181°

210°

250°

13.



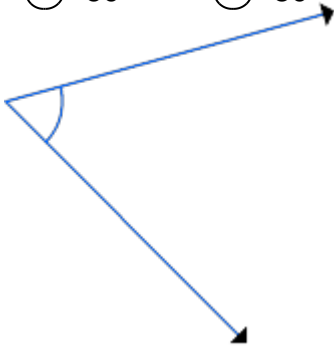
15°

45°

14.

60°

80°



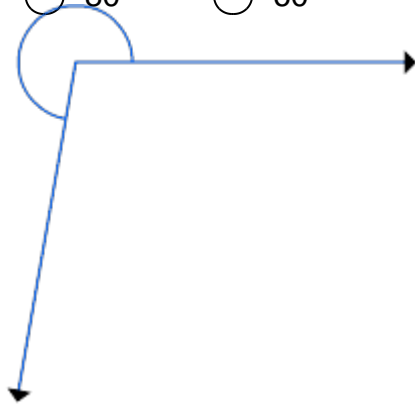
45°

30°

15.

80°

60°



220°

260°

270°

300°