

## Identify 2D Shapes Part 1

---

Identify the given shape.

1.




- Rectangle
- Triangle
- Circle
- Square

2.



- Rectangle
- Triangle
- Circle
- Square

3.




- Square
- Triangle
- Circle
- Rectangle

4.



- Rectangle
- Triangle
- Circle
- Square

5.



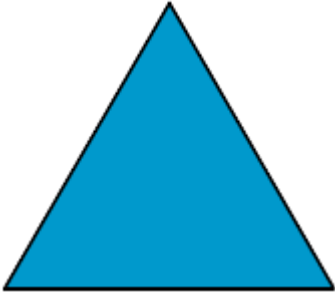
- Rectangle
- Triangle
- Circle
- Square

6.




- Rectangle
- Triangle
- Circle
- Square

7.



- Rectangle
- Triangle
- Circle
- Square

8.




- Rectangle
- Triangle
- Circle
- Square

9.



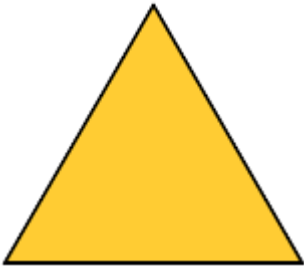
- Rectangle
- Triangle
- Circle
- Square

10.





- Rectangle
- Triangle
- Circle
- Square

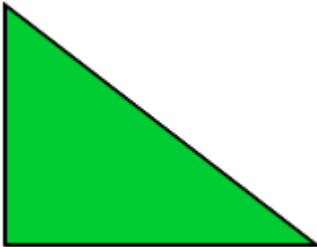
11. Which of the following shapes is a rectangle?




12. Which of the following shapes is not a rectangle?



13. Which of the following shapes is a triangle?



14. Which of the following shapes is a circle?



15. Which of the following shapes is a square?

