

## Identify 3D Shapes

---

Identify the given shape.

1.



- cube                       cylinder  
 sphere                       cone

2.



- cone                       cylinder  
 sphere                       cube

3.



- cuboid                       triangular pyramid  
 sphere                       cone

4.



cuboid

triangular pyramid

sphere

cone

5.



cube

triangular pyramid

sphere

cone

6.



cube

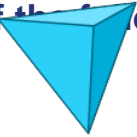
triangular pyramid

sphere

cone

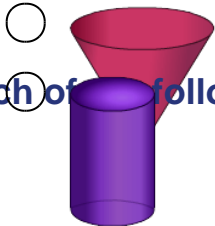
Which of the following shapes is a pyramid?

7.



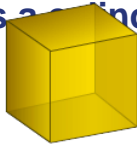
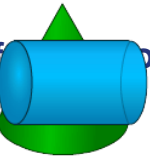
Which of the following shapes is a cylinder?

8.

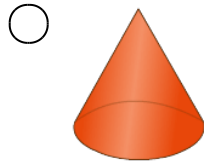
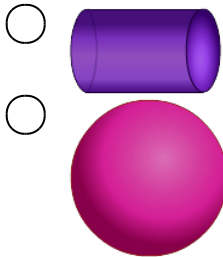


Which of the following shapes is a cylinder?

9.

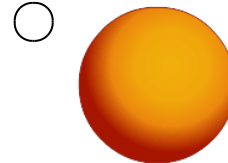
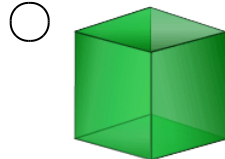
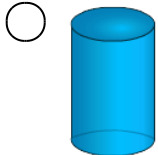


10.



Which of the following shapes is a cube?

11.



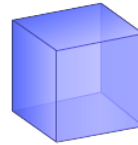
**Which of the following shapes is a cone?**

12.



**Which of the following shapes is a cube?**

13.



**Which shape does a pen resembles?**

14.



Sphere



Cylinder



Cube



Prism

**What is the shape of your cupboard?**

15.



Sphere



Cylinder



Cuboid



Pyramid