

Lines, Line Segments, and Rays

Identify the given figure.

1.



- line
- line segment
- ray

2.



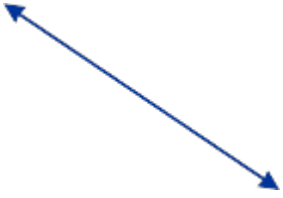
- line
- line segment
- ray

3.



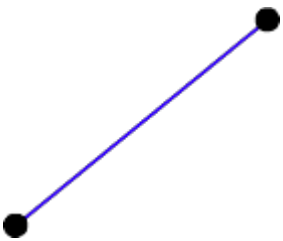
- line
- line segment
- ray

4.



- line
- line segment
- ray

5.



- line
- line segment
- ray

6.




- line
- line segment
- ray

7.



- line
- line segment
- ray

8.



- line
- line segment
- ray

9.



- line
- line segment
- ray

10.



- line
- line segment
- ray

Name the starting point of the given ray.

