


Lines of Symmetry Part 2

Which of the following figures have 1 line of symmetry?

1.



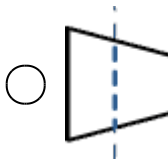
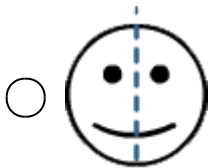
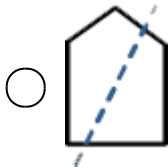
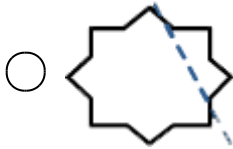
How many lines of symmetry does this figure have?

2.

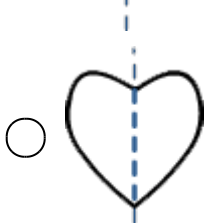
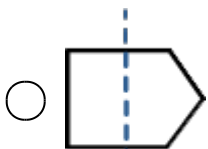
 3 5 6 4

In which of the following options, the dotted line is the correct line of symmetry of the figure?

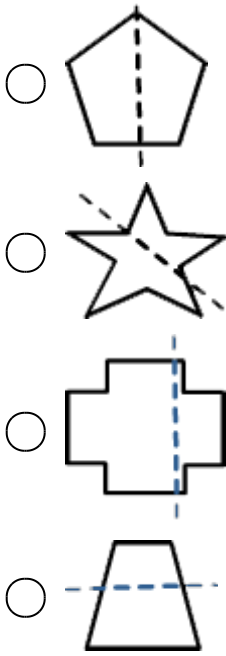
3.




4.



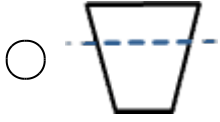
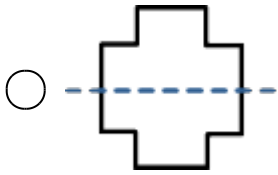
5.



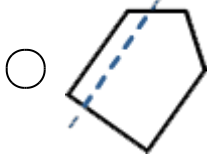
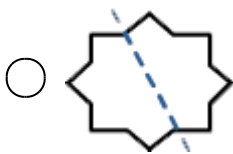
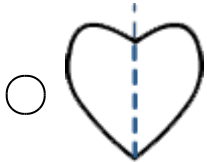
6.



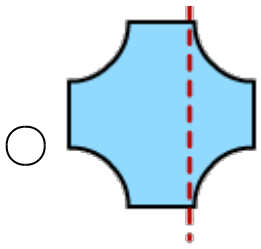
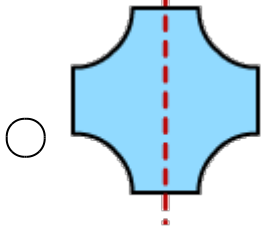
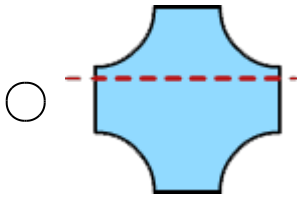
7.



8.

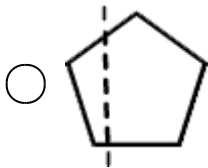
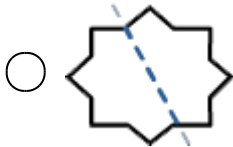
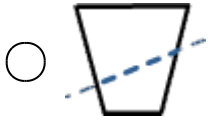


9.



None of these

10.



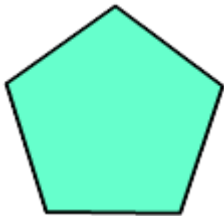
How many lines of symmetry does this figure have?

11.



- 1
- 2
- 3
- 4

12.



- 10
- 6
- 5
- 3

Mike has a standard piece of paper that is rectangle in shape. How many lines of symmetry does it have?

13. 1
- 2
- 4
- 3

How many lines of symmetry does this figure have?

14.



- 1
- 3
- 2
- 4

15.



- 1
- 2
- 4
- 5