

Open and Closed Shapes


Is the given shape open or closed?

1.



- Open
- Closed

2.



- Closed
- Open

3.



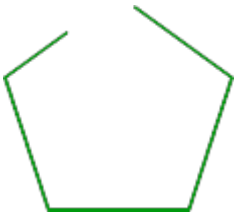
- Open
- Closed

4.



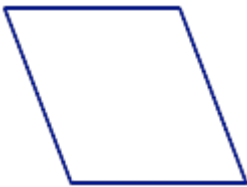
- Closed
- Open

5.



- Open
- Closed

6.



- Open
- Closed

7.



- Closed
- Open

8.



- Closed
- Open

9.



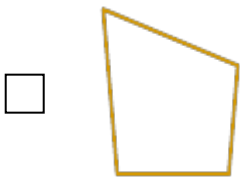
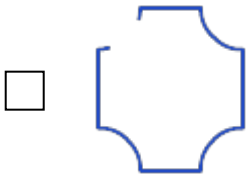
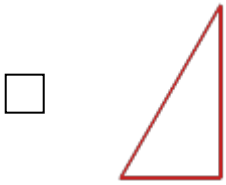
- Open
- Closed

10.

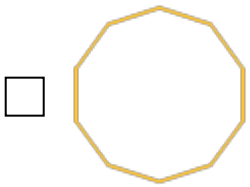
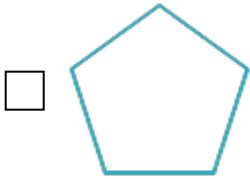
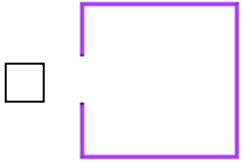


- Open
- Closed

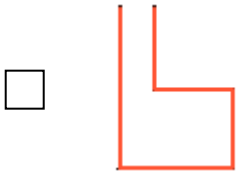
11. Which of the following shapes are open?



12. Which of the following shapes is open?



13. Which of the following shapes is closed?



14. Which of the following shapes is open?



15. Which of the following shapes is closed?

