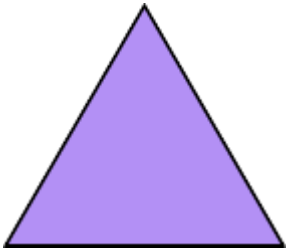


## Regular and Irregular Polygons

---

Is this shape a regular polygon?

1.



Yes     No

Is this shape an irregular polygon?

2.



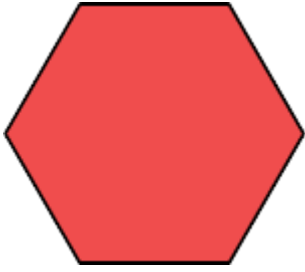
Yes     No

3.



Yes     No


4.



Yes     No

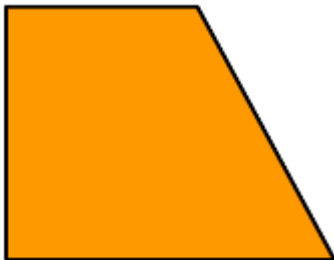
**Is this shape a regular polygon?**

5.



Yes     No

6.



Yes     No

Is this shape an irregular polygon?


7.



Yes     No

Is this shape a regular polygon?

8.



Yes     No


9.



Yes     No

Is this shape an irregular polygon?

10.



Yes

No