



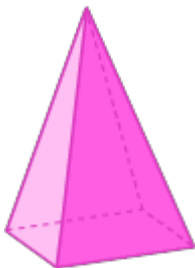
## Relate Planar and Solid Figures

---

1. Which shape(s) will you obtain by tracing the faces of the given solid shape?

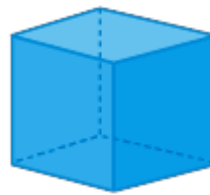



2.

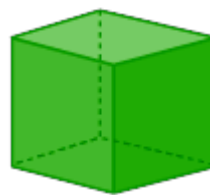


Which solid shape can be traced to make the given shape?

3.

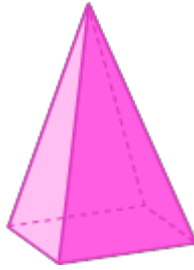


4. Which solid shape(s) can be traced to make the given shape?

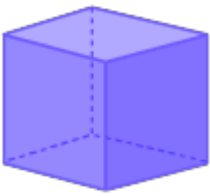


Which solid shape can be traced to make the given shape?

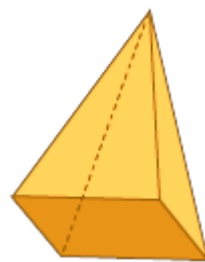
5.



6.



7.

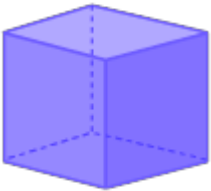


Which shape will you obtain by tracing the base of the given solid shape?


8.



9.



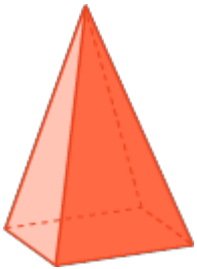
10.






11.



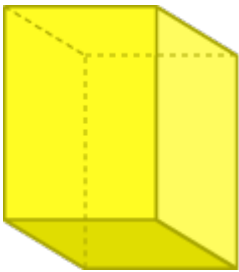
12.



13.



14.



15.

