

## Sides, Corners, and Angles of Shapes

---

How many angles does the given shape have?

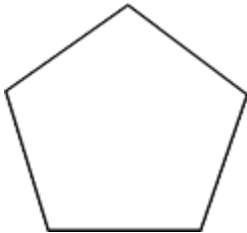
1.



- 1       2  
 3       4

How many corners does the given shape have?

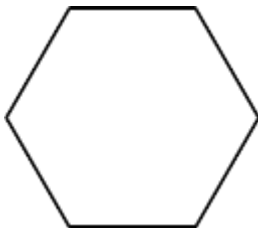
2.



- 2       3  
 4       5

How many sides does the given shape have?

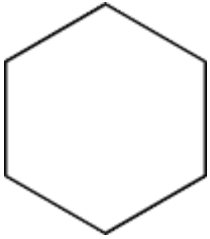
3.



- 5       6  
 8       7

How many angles does the given shape have?


4.



- 4       6  
 3       5

How many corners does the given shape have?

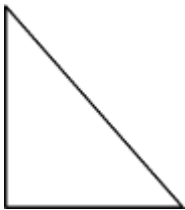
5.



- 2       3  
 4       5

How many sides does the given shape have?

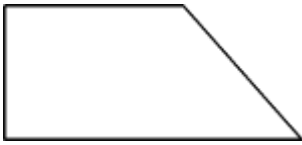
6.



- 4       6  
 3       2

How many angles does the given shape have?

7.



4

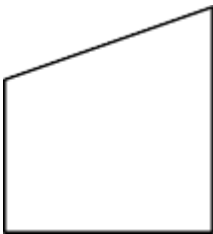
6

3

5

How many corners does the given shape have?

8.



2

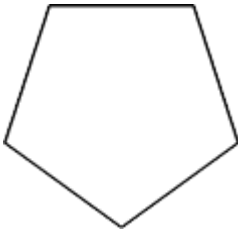
3

4

5

How many angles does the given shape have?

9.



4

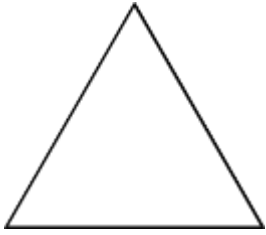
6

5

3

How many corners does the given shape have?

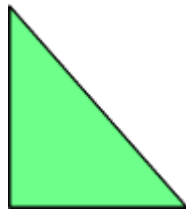

10.



- 2       3  
 4       5


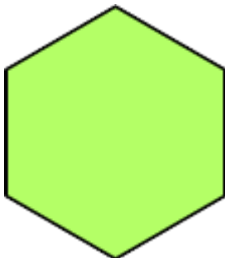
Which of the following shapes has fewer angles?

11.



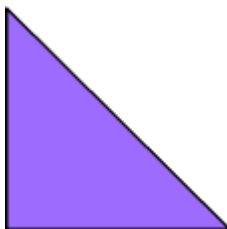
Which of the following shapes has 6 angles?

12.




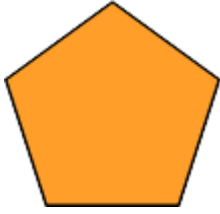
Which of the following shapes has fewer corners?

13.



Which of the following shapes has 4 corners?

14.



Which of the following shapes has fewer angles?

15.

