

Simple and Complex Polygons

Is the given polygon simple or complex?

1.



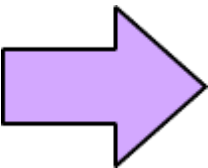
- Simple
 Complex

2.



- Simple
 Complex

3.




- Simple
 Complex

4.



- Simple
- Complex

5.



- Simple
- Complex

6.



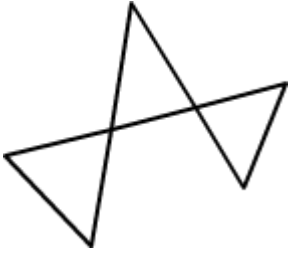
- Simple
- Complex

7.




- Simple
- Complex

8.



- Simple
- Complex

9.



- Simple
- Complex

10.



- Simple
- Complex