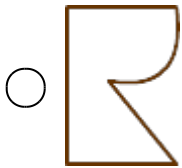
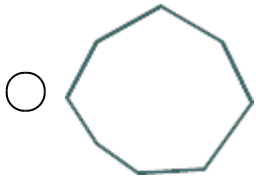


## What are Polygons?

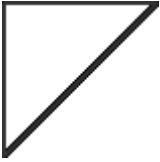
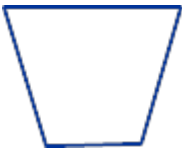
---

Which of the following figures is not a polygon?

1.



2.

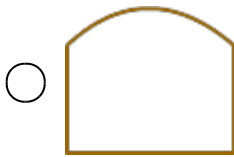
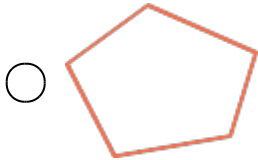



3.



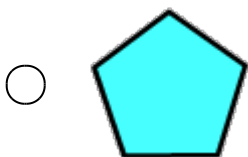
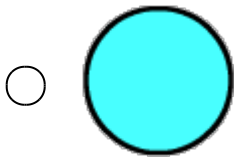

Which of the following figures is a polygon?

4.



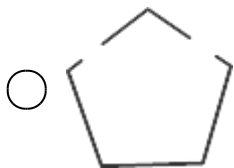
Which of the following figures is not a polygon?

5.


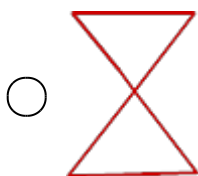


Which of the following figures is a polygon?

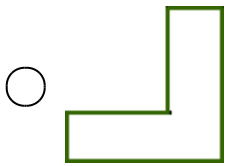
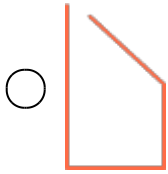
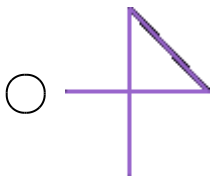
6.



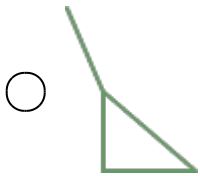
7.



8.







9.




Which of the following figures is not a polygon?

10.

- 
- 
- 
- 

Identify the given shape.

11.



- Triangle
- Quadrilateral
- Pentagon
- Hexagon

**How many sides does a hexagon have?**

12.  3  
 4  
 5  
 6

**A polygon with ten sides is called a \_\_\_\_\_.**

13.  decagon  
 heptagon  
 hexagon  
 octagon

**How many sides does an octagon have?**

14.  10  
 5  
 8  
 7

**Which of the following polygons have six sides?**

15.  Octagon  
 Nonagon  
 Decagon  
 Hexagon