


Understand Multiplication Using Arrays

1. Identify all the multiplication expressions which correctly describe the picture given below:



- 5×4
- 4×6
- 6×4
- 4×5

2.




- 3×4
- 4×3
- 4×4
- 3×3

3.




- 3 x 9
- 5 x 6
- 6 x 5
- 9 x 3

4.



- 2 x 4
- 4 x 2
- 2 x 5
- 5 x 2

5.




4 x 8

3 x 9

8 x 4

9 x 3

6.



2 x 9


2 x 10

9 x 2

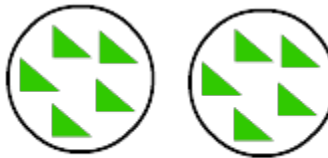
10 x 2

Identify the correct picture and the multiplication expression that shows 3 groups of 5 objects each.


7.



3×5



2×5



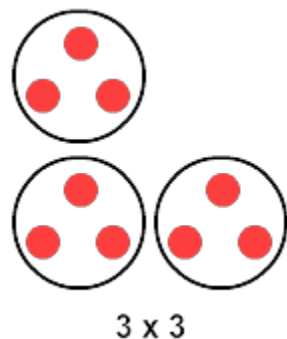
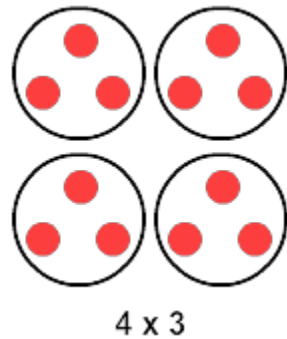
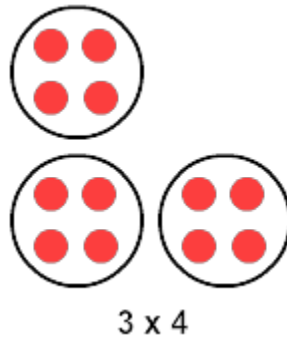
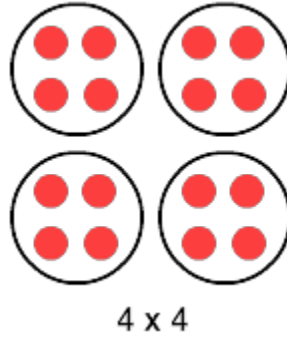
5×3



3×3

Identify the correct picture and the multiplication expression that shows 4 groups of 3 objects each.

8.



Identify the correct picture and the multiplication expression that shows 2 groups of 5 objects each.

9.

