

Subtraction Sentences up to 20


Identify the subtraction sentence that is shown by the given model.

1.



- $5 - 2 = 3$
- $5 - 3 = 2$
- $5 - 1 = 4$
- $5 - 5 = 0$

2.



- $7 - 2 = 5$
- $8 - 8 = 0$
- $8 - 1 = 7$
- $8 - 4 = 4$

3.




$7 - 4 = 3$

$7 - 1 = 6$

$7 - 5 = 2$

$7 - 7 = 0$

4.




$9 - 8 = 1$

$9 - 5 = 4$

$9 - 1 = 8$

$9 - 2 = 7$

5.




$9 - 2 = 7$

$7 - 1 = 6$

$9 - 6 = 3$

$9 - 5 = 4$

6.



$12 - 2 = 10$

$12 - 5 = 7$

$12 - 10 = 2$

$12 - 12 = 0$

7.



- $15 - 1 = 14$
- $15 - 10 = 5$
- $15 - 3 = 12$
- $15 - 7 = 8$

8.




- $18 - 1 = 17$
- $18 - 6 = 12$
- $18 - 3 = 15$
- $18 - 7 = 11$

9.



- $16 - 5 = 11$
- $16 - 10 = 6$
- $16 - 3 = 13$
- $16 - 4 = 12$

10.



- $19 - 1 = 18$
- $19 - 3 = 16$
- $19 - 2 = 17$
- $19 - 7 = 12$