


Even and Odd Numbers Part 1

Is the number of given triangles even or odd?

1.




even

odd

Is the number of the given triangles even or odd?

2.




even

odd

Is the number of given squares even or odd?

3.



even

odd

Is the number of given stars even or odd?

4.




even

odd

Is the number of the given circles even or odd?

5.

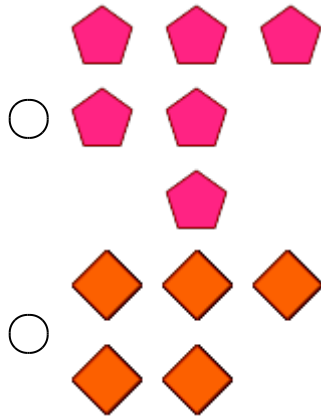


even

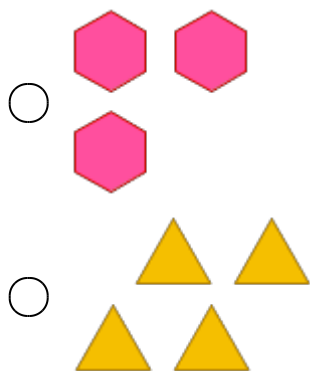
odd

Which one of the groups has even number of objects?



6.



7.





8.

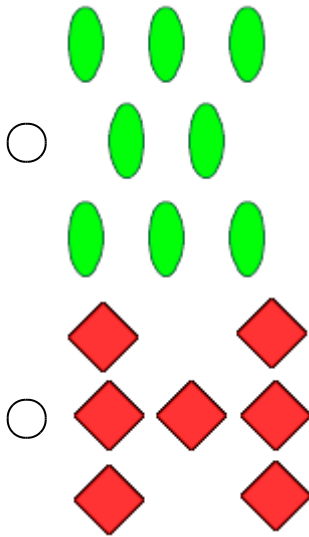


Which one of the groups has odd number of objects?

9.



10.



Identify whether the given number is even or odd.

11. 402

- even
- odd

12. 416

- even
- odd

13. 627

- even
- odd

14. 218

- even
- odd

15. 721

- even
- odd