

Rotation of the Earth

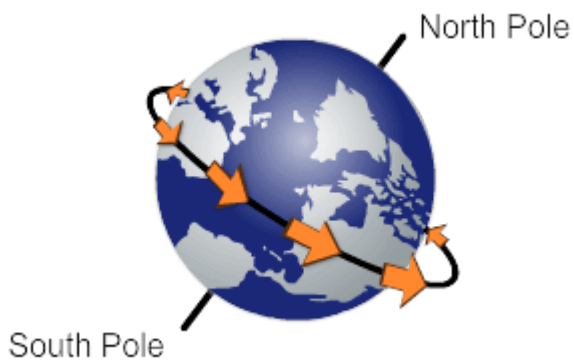
State whether the following statement is true or false.

1. You cannot feel the rotation of Earth.

- True
 False

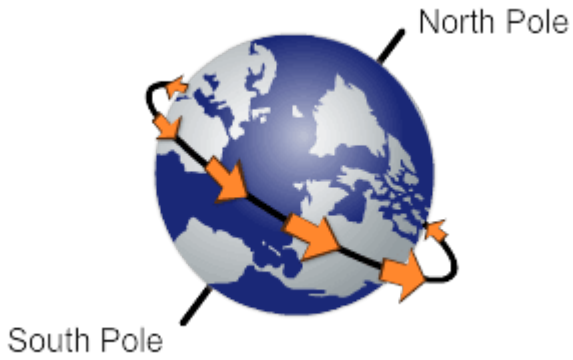
Choose the correct answer.

2. The spinning of Earth is called its _____.



- rotation
 direction

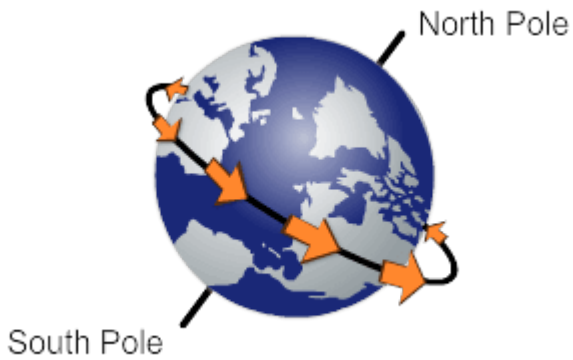
3. Earth spins on its own _____, an imaginary line passing through its center.



- axis
- middle

State whether the following statement is true or false.

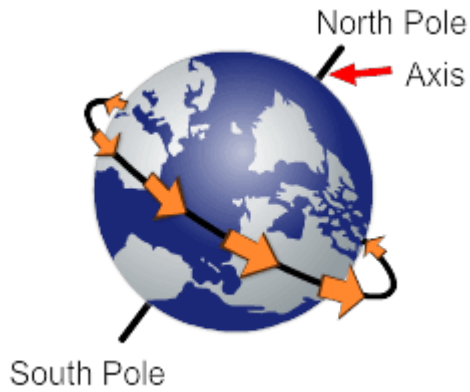
4. It takes Earth 24 hours to complete one rotation.



- True
- False

Choose the correct answer.

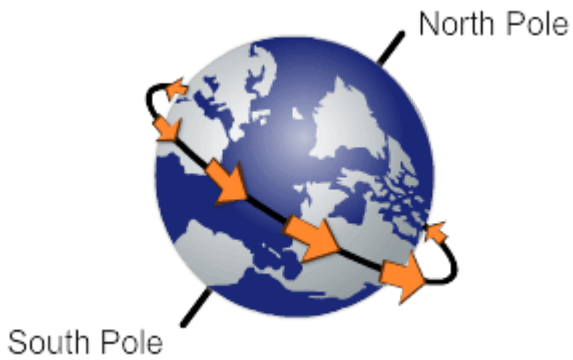
5. Earth's _____ causes the change in seasons on Earth.



- oceans
- tilt on its axis

What does this image show?

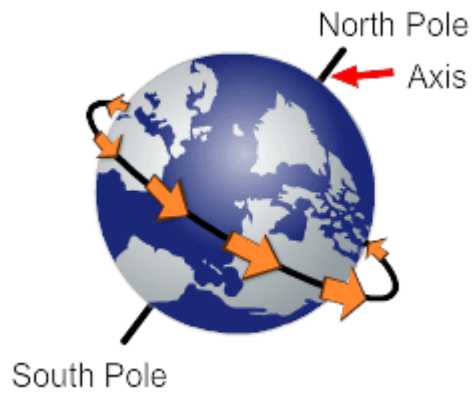
6.



- Earth's orbit
- Earth's axis

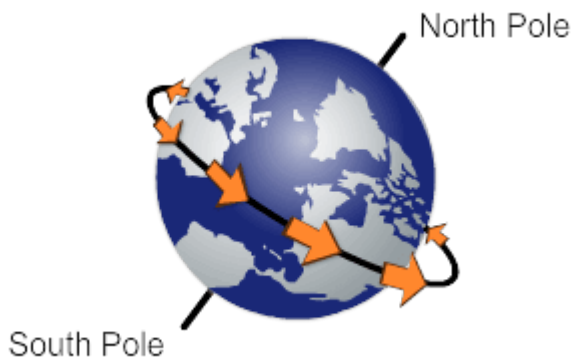
Choose the correct answer.

7. Earth rotates from _____.



- east to west
- west to east

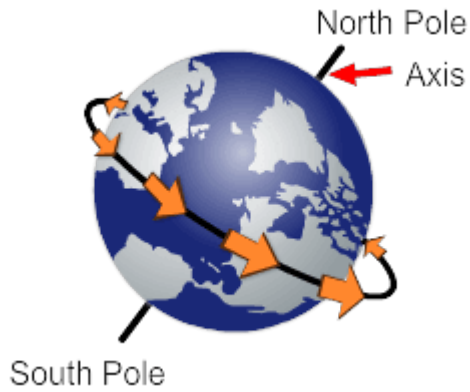
8. Earth rotates on its _____.



- axis
- orbit

State whether the following statement is true or false.

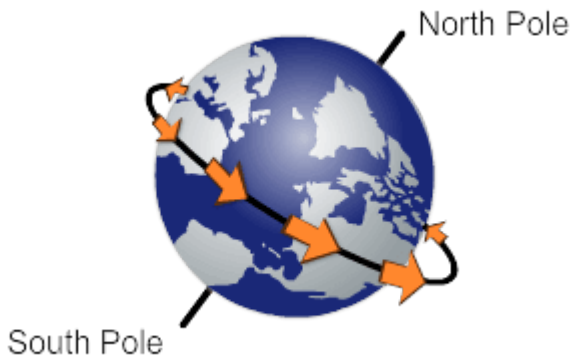
9. Earth rotates on its own axis twice in 24 hours.



- True
- False

Identify the incorrect statement about Earth's axis.

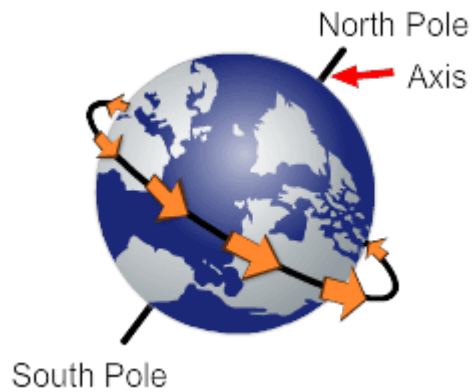
10.



- It is a real line.
- It passes through the center of Earth.
- It is tilted at an angle.

Choose the correct answer.

11. What happens as Earth rotates?



- Days and nights occur.
- Earth's axis gets bigger.

State whether the following statement is true or false.

12. The Sun rises in the east and sets in the west.



- True
- False

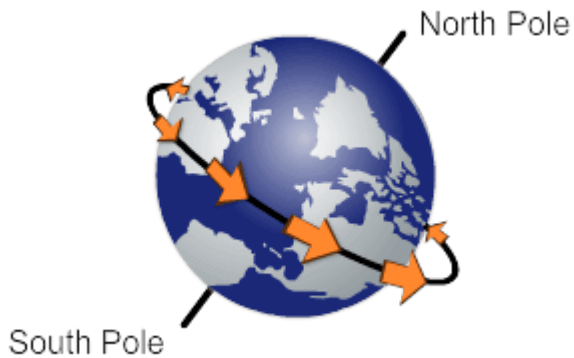
Choose the correct answer.

13. The _____ of Earth causes days and nights.



- rotation
- revolution


14. An imaginary line passing through the center of Earth is called its _____.



- axis
- orbit

Identify the correct statement.

15.



- Sun orbits the Earth.
- Earth orbits the Sun.
- Sun orbits the Moon.